




QUIZZES

Practice test 1 Unit 8



10 Questions



7 min

Topics

Magnetic field

Start Quiz

SAEED MDCAT

SAEED MDCAT TEAM



SAEEDMDCAT

06 : 58



1/10



7 min



Hint

Q : Two parallel beams of positrons moving in the same direction will

A

repel each other

B

not interact with each other

C

attract each other

D

be deflected normal to the plane containing the two beams

SAEED MDCAT

SAEED MDCAT TEAM



SAEEDMDCAT

1

2

3

4

5

6

7

06 : 56



2/10



7 min



Hint

Q : The force that appears as a result of the interaction between two moving charges is called

A

induced force

B

electrostatic force

C

magnetic force

D

gravitational force

SAEED MDCAT

SAEED MDCAT TEAM



SAEEDMDCAT

1

2

3

4

5

6

7

06 : 54



3/10



7 min



Hint

Q : The study of magnetism produced by electric current and electric current produced by changing magnetic field is called

A

magnetic field

B

electric current

C

electric and magnetic field

D

electromagnetism

SAEED MDCAT

SAEED MDCAT TEAM



SAEEDMDCAT

1

2

3

4

5

6

7

06 : 51



4/10



7 min



Hint

Q : If a current flows through the wire directed out of the paper, the magnetic field is represented by

A

clockwise circular lines

B

anticlock wise circular lines

C

lines parallel to the wire

D

lines perpendicular to the wire

SAEED MDCAT

SAEED MDCAT TEAM



SAEEDMDCAT

1

2

3

4

5

6

7

06 : 48



5/10



7 min



Hint

Q : The relationship between Tesla and smaller unit Gauss of magnetic induction is given by

A

$$1\text{T} = 10^3 \text{ G}$$

B

$$1\text{T} = 10^{-4} \text{ G}$$

C

$$1\text{T} = 10^{-2} \text{ G}$$

D

$$1\text{T} = 10^4 \text{ G}$$

SAEED MDCAT

SAEED MDCAT TEAM



SAEEDMDCAT

1

2

3

4

5

6

7

06 : 46



6/10



7 min



Hint

Q : The direction of the magnetic lines of force can be found by using:

A

Right hand rule

B

Henry's law

C

Left hand rule

D

Faraday's law

SAEED MDCAT

SAEED MDCAT TEAM



SAEEDMDCAT

1

2

3

4

5

6

7

06 : 44



7/10



7 min



Hint

Q : The direction at a point on the magnetic lines of force can be taken along:

A

normal at that point

B

the tangent at that point

C

axis of the magnetic line of force at that point

D

can't be taken

SAEED MDCAT

SAEED MDCAT TEAM



SAEEDMDCAT

1

2

3

4

5

6

7

06 : 39



8/10



7 min



Hint

Q : The force that appears as a result of the interaction between two moving charges is called

A

induced force

B

electrostatic force

C

magnetic force

D

gravitational force

SAEED MDCAT

SAEED MDCAT TEAM



SAEEDMDCAT

4

5

6

7

8

9

10

06 : 37



9/10



7 min



Hint

Q : The study of magnetism produced by electric current and electric current produced by changing magnetic field is called

A

magnetic field

B

electric current

C

electric and magnetic field

D

electromagnetism

SAEED MDCAT

SAEED MDCAT TEAM



SAEEDMDCAT

4

5

6

7

8

9

10

06 : 34



10/10



7 min



Hint

Q : The direction of magnetic field due to current carrying conductor can be determined by

A

left hand rule

B

right hand rule

C

palm right hand rule

D

Fleming's left hand rule

SAEED MDCAT

SAEED MDCAT TEAM



SAEEDMDCAT

4

5

6

7

8


9

10



QUIZ RESULT

Practice test 1 Unit 8



10



7 min



03-May-2021



0 sec



0/10



0.0%

SAEED MDCAT

Result Detail

SAEED MDCAT TEAM



SAEEDMDCAT





Practice test 1 Unit 8



Correct



Unattempted



Incorrect



1/10

Q : Two parallel beams of positrons moving in the same direction will

A

repel each other

B

not interact with each other

C

attract each other

D

be deflected normal to the plane containing the two beams

Explanation

Similar case, two wires carrying current in same direction.

1

2

3

4

5

6

7



Practice test 1 Unit 8



Correct



Unattempted



Incorrect



2/10

Q : The force that appears as a result of the interaction between two moving charges is called

A

induced force

B

electrostatic force

C

magnetic force

D

gravitational force

Explanation

SAEED MDCAT TEAM

Book line



SAEEDMDCAT

1

2

3

4

5

6

7



Practice test 1 Unit 8



Correct



Unattempted



Incorrect



3/10

Q : The study of magnetism produced by electric current and electric current produced by changing magnetic field is called

A

magnetic field

B

electric current

C

electric and magnetic field

D

electromagnetism

Explanation

Definition



SAEEDMDCAT

1

2

3

4

5

6

7



Practice test 1 Unit 8



Correct



Unattempted



Incorrect



4/10

Q : If a current flows through the wire directed out of the paper, the magnetic field is represented by

A

clockwise circular lines

B

anticlock wise circular lines

C

lines parallel to the wire

D

lines perpendicular to the wire

Explanation

SAEED MDCAT TEAM
information



SAEEDMDCAT

1

2

3

4

5

6

7



Practice test 1 Unit 8



Correct



Unattempted



Incorrect



5/10

Q : The relationship between Tesla and smaller unit Gauss of magnetic induction is given by

A

$$1\text{T} = 10^3 \text{ G}$$

B

$$1\text{T} = 10^{-4} \text{ G}$$

C

$$1\text{T} = 10^{-2} \text{ G}$$

D

$$1\text{T} = 10^4 \text{ G}$$

Explanation

SAEED MDCAT TEAM

$$1\text{T} = 10^4 \text{ G}$$



SAEEDMDCAT

1

2

3

4

5

6

7



Practice test 1 Unit 8



Correct



Unattempted



Incorrect



6/10

Q : The direction of the magnetic lines of force can be found by using:



Right hand rule



Henry's law



Left hand rule



Faraday's law

Explanation

Direction of magnetic lines of forces can be found by right hand rule.



SAEEDMDCAT

1

2

3

4

5

6

7



Practice test 1 Unit 8



Correct



Unattempted



Incorrect



7/10

Q : The direction at a point on the magnetic lines of force can be taken along:

A

normal at that point

B

the tangent at that point

C

axis of the magnetic line of force at that point

D

can't be taken

Explanation

Direction of magnetic field is along the tangent on a curve.



SAEEDMDCAT

1

2

3

4

5

6

7



Practice test 1 Unit 8



Correct



Unattempted



Incorrect



8/10

Q : The force that appears as a result of the interaction between two moving charges is called

A

induced force

B

electrostatic force

C

magnetic force

D

gravitational force

Explanation

SAEED MDCAT TEAM

Book line



SAEEDMDCAT

4

5

6

7

8

9

10



Practice test 1 Unit 8



Correct



Unattempted



Incorrect



9/10

Q : The study of magnetism produced by electric current and electric current produced by changing magnetic field is called

A

magnetic field

B

electric current

C

electric and magnetic field

D

electromagnetism

Explanation

Definition



SAEEDMDCAT

4

5

6

7

8

9

10



Practice test 1 Unit 8



Correct



Unattempted



Incorrect



10/10

Q : The direction of magnetic field due to current carrying conductor can be determined by

A

left hand rule

B

right hand rule

C

palm right hand rule

D

Fleming's left hand rule

Explanation

Right hand rule.



SAEEDMDCAT

4

5

6

7

8


9

10



QUIZZES

Practice test 2 Unit 8



10 Questions



7 min

Topics

Magnetic field, Magnetic Flux and Magnetic Flux Density

Start Quiz

SAEED MDCAT

SAEED MDCAT TEAM



SAEEDMDCAT

06 : 58



1/10



7 min



Hint

Q : Magnetic flux would be maximum when

A

\vec{B} is parallel to \vec{A}

B

\vec{B} is at 45° to \vec{A}

C

\vec{B} is perpendicular to \vec{A}

D

none of these

SAEED MDCAT

SAEED MDCAT TEAM



SAEEDMDCAT

1

2

3

4

5

6

7

06 : 54



2/10



7 min



Hint

Q : The Weber is unit of measure of

A

conductance

B

electric current

C

magnetic flux

D

electric flux

SAEED MDCAT

SAEED MDCAT TEAM



SAEEDMDCAT

1

2

3

4

5

6

7

06 : 52



3/10



7 min



Hint

Q : If 0.5 T magnetic field is perpendicular to the 0.5 m² area then the magnetic flux would be

A

0.25 wb

B

6.25 wb

C

1.25 wb

D

zero

SAEED MDCAT

SAEED MDCAT TEAM



SAEEDMDCAT

1

2

3

4

5

6

7

06 : 50



4/10



7 min



Hint

Q : The magnetic field in a certain region is given by $40\hat{i} - 18\hat{k}$. How much flux passes through a 5.0 cm^2 area loop in this region if loop lies flat in YZ plane?

A

$90 \times 10^{-4} \text{ Wb}$

B

$2 \times 10^{-2} \text{ Wb}$

C

$2 \times 10^2 \text{ Wb}$

D

$9 \times 10^{-4} \text{ Wb}$

SAEED MDCAT

SAEED MDCAT TEAM



SAEEDMDCAT

1

2

3

4

5

6

7

06 : 48



5/10



7 min



Hint

Q : For which of the following angles magnetic flux reduces to half of its maximum?

A

$$\theta = 45^\circ$$

B

$$\theta = 180^\circ$$

C

$$\theta = 0^\circ$$

D

$$\theta = 60^\circ$$

SAEED MDCAT

SAEED MDCAT TEAM



SAEEDMDCAT

1

2

3

4

5

6

7

06 : 45



6/10



7 min



Hint

Q : The relationship between Tesla and smaller unit Gauss of magnetic induction is given by

A

$$1\text{T} = 10^3 \text{ G}$$

B

$$1\text{T} = 10^{-4} \text{ G}$$

C

$$1\text{T} = 10^{-2} \text{ G}$$

D

$$1\text{T} = 10^4 \text{ G}$$

SAEED MDCAT

SAEED MDCAT TEAM



SAEEDMDCAT

1

2

3

4

5

6

7

06 : 42



7/10



7 min



Hint

Q : The direction of the magnetic lines of force can be found by using:

A

Right hand rule

B

Henry's law

C

Left hand rule

D

Faraday's law

SAEED MDCAT

SAEED MDCAT TEAM



SAEEDMDCAT

1

2

3

4

5

6

7

06 : 35



8/10



7 min



Hint

Q : A conducting rod of 1 meter length and 1 kg mass is suspended by two vertical wires through its ends. An external magnetic field of 2 Tesla is applied normal to the rod. Now the current to be passed through the rod so as to make the tension in the wires zero is [take $g = 10 \text{ ms}^{-2}$]

A

0.5 Amp

B

15 Amp

C

5 Amp

D

1.5 Amp

SAEED MDCAT

SAEED MDCAT TEAM



SAEEDMDCAT

4

5

6

7

8

9

10

06 : 32



9/10




7 min



Hint

Q : The diagram shows a straight wire carrying a flow of electrons into the page. The wire is between the poles of a permanent magnet. The direction of the magnetic force exerted on the wire is



A



B



C



D



SAEED MDCAT

SAEED MDCAT TEAM



SAEEDMDCAT

4

5

6

7

8

9

10

06 : 29



10/10



7 min



Hint

Q : Magnetic flux and flux density are related by

A

Magnetic flux = flux density / area

B

Magnetic flux = flux density \times area

C

Flux density = magnetic flux area

D

Flux density = magnetic flux \times area

SAEED MDCAT

SAEED MDCAT TEAM



SAEEDMDCAT

4

5

6

7

8


9

10



QUIZ RESULT

Practice test 2 Unit 8



10



7 min



03-May-2021



0 sec



0/10



0.0%

SAEED MDCAT

Result Detail

SAEED MDCAT TEAM



SAEEDMDCAT





Practice test 2 Unit 8



Correct



Unattempted



Incorrect



1/10

Q : Magnetic flux would be maximum when



\vec{B} is parallel to \vec{A}



\vec{B} is at 45° to \vec{A}



\vec{B} is perpendicular to \vec{A}



none of these

Explanation

As, $\phi = BA \cos \theta$

$\phi_{\max} = BA$

When $\cos \theta = 1 \rightarrow \theta = 0^\circ$

So, flux will be maximum when \vec{B} is parallel to \vec{A}



Practice test 2 Unit 8



Correct



Unattempted



Incorrect



2/10

Q : The Weber is unit of measure of

A

conductance

B

electric current

C

magnetic flux

D

electric flux

Explanation

Weber is the SI unit of magnetic flux



SAEEDMDCAT

1

2

3

4

5

6

7



Practice test 2 Unit 8



Correct



Unattempted



Incorrect



3/10

Q : If 0.5 T magnetic field is perpendicular to the 0.5 m² area then the magnetic flux would be

A

0.25 wb

B

6.25 wb

C

1.25 wb

D

zero

Explanation

$$\phi = BA \cos \theta$$

Here surface area is perpendicular hence vector area must be parallel with magnetic field. ($\theta = 0^\circ$)



Incorrect



4/10

Q : The magnetic field in a certain region is given by $40\hat{i} - 18\hat{k}$. How much flux passes through a 5.0 cm^2 area loop in this region if loop lies flat in YZ plane?

A

 $90 \times 10^{-4} \text{ Wb}$

B

 $2 \times 10^{-2} \text{ Wb}$

C

 $2 \times 10^2 \text{ Wb}$

D

 $9 \times 10^{-4} \text{ Wb}$

Explanation

$$\vec{B} = 40\hat{i} + 0\hat{j} - 18\hat{k}$$

$$\vec{A} = (5\hat{i} + 0\hat{j} + 0\hat{k}) \times 10^{-4} \text{ m}^2$$

$$\phi_B = \vec{B} \cdot \vec{A}$$

$$= 40 \times 5 \times 10^{-4}$$

$$= 2 \times 10^{-2} \text{ Wb}$$



Practice test 2 Unit 8



Correct



Unattempted



Incorrect



5/10

Q : For which of the following angles magnetic flux reduces to half of its maximum?

A

$$\theta = 45^\circ$$

B

$$\theta = 180^\circ$$

C

$$\theta = 0^\circ$$

D

$$\theta = 60^\circ$$

Explanation

$$\phi_b = BA \cos \theta$$

$$\phi_b = (\phi_b)_{\max} \cos \theta$$

If $\theta = 60^\circ$ then

$$\phi_b = (\phi_b)_{\max} \cos 60^\circ$$

$$\phi_b = \frac{1}{2} (\phi_b)_{\max}$$

1

2

3

4

5

6

7



Practice test 2 Unit 8



Correct



Unattempted



Incorrect



6/10

Q : The relationship between Tesla and smaller unit Gauss of magnetic induction is given by

A

$$1\text{T} = 10^3 \text{ G}$$

B

$$1\text{T} = 10^{-4} \text{ G}$$

C

$$1\text{T} = 10^{-2} \text{ G}$$

D

$$1\text{T} = 10^4 \text{ G}$$

Explanation

SAEED MDCAT TEAM

$$1\text{T} = 10^4 \text{ G}$$



SAEEDMDCAT

1

2

3

4

5

6

7



Practice test 2 Unit 8



Correct



Unattempted



Incorrect



7/10

Q : The direction of the magnetic lines of force can be found by using:



Right hand rule



Henry's law



Left hand rule



Faraday's law

Explanation

Direction of magnetic lines of forces can be found by right hand rule.



SAEEDMDCAT

1

2

3

4

5

6

7



Incorrect



8/10

Q : A conducting rod of 1 meter length and 1 kg mass is suspended by two vertical wires through its ends. An external magnetic field of 2 Tesla is applied normal to the rod. Now the current to be passed through the rod so as to make the tension in the wires zero is [take $g = 10 \text{ ms}^{-2}$]

A

0.5 Amp

B

15 Amp

C

5 Amp

D

1.5 Amp

Explanation

$$F_{\text{magnetic}} = F_{\text{gravitational}}$$

$$F_b = F_g$$

$$ILB = mg$$

$$I = \frac{mg}{BL} = \frac{1 \times 10}{1 \times 2} = 5 \text{ Amp}$$



Incorrect



9/10

Q : The diagram shows a straight wire carrying a flow of electrons into the page. The wire is between the poles of a permanent magnet. The direction of the magnetic force exerted on the wire is



A



B



C



D



Explanation

Right hand palm rule.

$$\vec{F} = I(\vec{L} \times \vec{B})$$

Cross product of L and B



Practice test 2 Unit 8



Correct



Unattempted



Incorrect



10/10

Q : Magnetic flux and flux density are related by

A

Magnetic flux = flux density / area

B

Magnetic flux = flux density x area

C

Flux density = magnetic flux area

D

Flux density = magnetic flux x area

Explanation

SAEED MDCAT TEAM

$$\phi = BA$$




SAEEDMDCAT



QUIZZES

Practice test 3 Unit 8



10 Questions



7 min

Topics

Force acting on a charged particle in a uniform magnetic field.

Start Quiz

SAEED MDCAT

SAEED MDCAT TEAM



SAEEDMDCAT

06 : 59



1/10



7 min



Hint

Q : The velocity of a particle of charge $+4.0 \times 10^{-9} \text{ C}$ and mass $2 \times 10^{-4} \text{ kg}$ is perpendicular to a 0.1-tesla magnetic field. If the particle's speed is $3 \times 10^4 \text{ m/s}$, what is the acceleration of this particle due to the magnetic force?



0.0006 m/s^2



0.006 m/s^2



0.06 m/s^2



0.6 m/s^2

SAEED MDCAT

SAEED MDCAT TEAM



SAEEDMDCAT

1

2

3

4

5

6

7

06 : 56



2/10

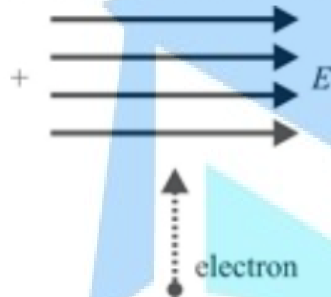


7 min



Hint

Q : An electron is projected at right angles to a uniform electric field E . It will deflect:



A

Into the plane of the paper

B

Out of the paper

C

To the left

D

To the right

SAEED MDCAT

SAEED MDCAT TEAM



SAEEDMDCAT

1

2

3

4

5

6

7

06 : 54



3/10



7 min



Hint

Q : An electron enters a region of uniform perpendicular \vec{E} and \vec{B} fields. It is observed that the velocity \vec{v} of the electron is undeflected. A possible explanation is:

A

\vec{v} is parallel to \vec{E} and has magnitude E/B

B

\vec{v} is parallel to

C

\vec{v} is perpendicular to both \vec{E} and \vec{B} and has magnitude B/E

D

\vec{v} is perpendicular to both \vec{E} and \vec{B} and has magnitude E/B

SAEED MDCAT

SAEED MDCAT TEAM



SAEEDMDCAT

1

2

3

4

5

6

7

06 : 52



4/10



7 min



Hint

Q : A proton (mass m and charge $+e$) and an α -particle (mass $4m$ and charge $+2e$) are projected with the same kinetic energy at right angles to the uniform magnetic field. Which one of the following statements will be true

A

the α -particle and the proton will be bent in a circular path with the same radius

B

the α -particle and the proton will go through the field in a straight line

C

the α -particle will be bent in a circular path with a small radius that for the proton

D

the radius of the path of the α -particle will be greater than that of the proton

SAEED MDCAT

SAEED MDCAT TEAM



SAEEDMDCAT

1

2

3

4

5

6

7

06 : 50



5/10



7 min



Hint

Q : A charge of 1C is moving in a magnetic field of 0.5Tesla with a velocity of 10m/sec Perpendicular to the field. Force experienced is

A

5 N

B

10N

C

0.5 N

D

0N

SAEED MDCAT

SAEED MDCAT TEAM



SAEEDMDCAT

1

2

3

4

5

6

7

06 : 48



6/10



7 min



Hint

Q :

A proton enters a magnetic field of flux density 1.5 weber/m^2 with a velocity of $2 \times 10^7 \text{ m/sec}$ at an angle of 30° with the field. The force on the proton will be

A

$2.4 \times 10^{-12} \text{ N}$

B

$0.24 \times 10^{-12} \text{ N}$

C

$24 \times 10^{-12} \text{ N}$

D

$0.024 \times 10^{-12} \text{ N}$

SAEED MDCAT

SAEED MDCAT TEAM



SAEEDMDCAT

1

2

3

4

5

6

7

06 : 45



7/10



7 min



Hint

Q :

A positively charged particle moving due east enters a region of uniform magnetic field directed vertically upwards. The particle will

A

Get deflected vertically upwards

B

Move in a circular orbit with its speed increased

C

Move in a circular orbit with its speed unchanged

D

Continue to move due east

SAEED MDCAT

SAEED MDCAT TEAM



SAEEDMDCAT

1

2

3

4

5

6

7

06 : 41



8/10



7 min



Hint

Q :

An electron is travelling in east direction and a magnetic field is applied in upward direction then electron will deflect in

A

South

B

North

C

West

D

East

SAEED MDCAT

SAEED MDCAT TEAM



SAEEDMDCAT

4

5

6

7

8

9

10

06 : 39



9/10



7 min



Hint

Q :

A homogeneous electric field E and a uniform magnetic field B are pointing in the same direction. A proton is projected with its velocity parallel to E . It will

A

Go on moving in the same direction with increasing velocity

B

Go on moving in the same direction with constant velocity

C

Turn to its right

D

Turn to its left

SAEED MDCAT

SAEED MDCAT TEAM



SAEEDMDCAT

4

5

6

7

8

9

10

06 : 37



10/10



7 min



Hint

Q :

An electron is travelling along the x-direction. It encounters a magnetic field in the y-direction. Its subsequent motion will be

A

Straight line along the x-direction

B

A circle in the xz-plane

C

A circle in the yz-plane

D

A circle in the xy-plane

SAEED MDCAT

SAEED MDCAT TEAM



SAEEDMDCAT

4

5

6

7

8


9

10



QUIZ RESULT

Practice test 3 Unit 8



10



7 min



03-May-2021



0 sec



0/10



0.0%

SAEED MDCAT

Result Detail

SAEED MDCAT TEAM



SAEEDMDCAT





Incorrect



1/10

Q : The velocity of a particle of charge $+4.0 \times 10^{-9} \text{ C}$ and mass $2 \times 10^{-4} \text{ kg}$ is perpendicular to a 0.1-tesla magnetic field. If the particle's speed is $3 \times 10^4 \text{ m/s}$, what is the acceleration of this particle due to the magnetic force?

A

 0.0006 m/s^2

B

 0.006 m/s^2

C

 0.06 m/s^2

D

 0.6 m/s^2

Explanation

$$qvB = ma$$

$$a = \frac{qvB}{m}$$

$$a = \frac{4 \times 10^{-9} \times 3 \times 10^4 \times 0.1}{2 \times 10^{-4}}$$

$$a = 6 \times 10^{-2} \text{ ms}^{-2} = 0.06 \text{ ms}^{-2}$$



Practice test 3 Unit 8



Correct



Unattempted

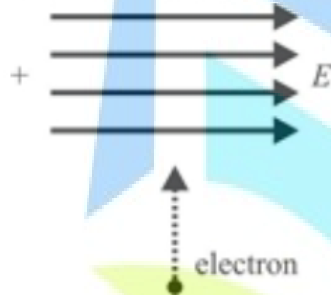


Incorrect



2/10

Q : An electron is projected at right angles to a uniform electric field E . It will deflect:



A

Into the plane of the paper

B

Out of the paper

C

To the left

D

To the right

Explanation



SAEEDMDCAT

Electron will move toward positive side i.e. towards left.

1

2

3

4

5

6

7



Practice test 3 Unit 8



Correct



Unattempted



Incorrect



3/10

Q : An electron enters a region of uniform perpendicular \vec{E} and \vec{B} fields. It is observed that the velocity \vec{v} of the electron is undeflected. A possible explanation is:



\vec{v} is parallel to \vec{E} and has magnitude E/B



\vec{v} is parallel to



\vec{v} is perpendicular to both \vec{E} and \vec{B} and has magnitude B/E



\vec{v} is perpendicular to both \vec{E} and \vec{B} and has magnitude E/B

Explanation

In velocity selector, \vec{v} is perpendicular to both

\vec{E} and \vec{B} given as $v = \frac{E}{B}$

1

2

3

4

5

6

7



Incorrect



4/10

Q : A proton (mass m and charge $+e$) and an α -particle (mass $4m$ and charge $+2e$) are projected with the same kinetic energy at right angles to the uniform magnetic field. Which one of the following statements will be true



the α -particle and the proton will be bent in a circular path with the same radius



the α -particle and the proton will go through the field in a straight line



the α -particle will be bent in a circular path with a small radius than that of the proton



the radius of the path of the α -particle will be greater than that of the proton

Explanation

$$r = \frac{\sqrt{2mk}}{qB} \text{ i.e., } r \propto \frac{\sqrt{m}}{q}$$
 Here kinetic energy K and B are same

$$\therefore \frac{r_p}{r_a} = \frac{\sqrt{m_p}}{\sqrt{m_a}} \cdot \frac{q_a}{q_p} = \frac{\sqrt{m_p}}{\sqrt{4m_p}} \cdot \frac{2q_p}{q_p} = 1$$



Practice test 3 Unit 8



Correct



Unattempted



Incorrect



5/10

Q : A charge of 1C is moving in a magnetic field of 0.5Tesla with a velocity of 10m/sec Perpendicular to the field. Force experienced is



5 N



10N



0.5 N



0N

Explanation

SAEED MDCAT TEAM

$$F = qBv = 1 \times 0.5 \times 10 = 5 \text{ N}$$



SAEEDMDCAT

1

2

3

4

5

6

7



Practice test 3 Unit 8



Correct



Unattempted



Incorrect



6/10

Q:

A proton enters a magnetic field of flux density 1.5 weber/m^2 with a velocity of $2 \times 10^7 \text{ m/sec}$ at an angle of 30° with the field. The force on the proton will be



$2.4 \times 10^{-12} \text{ N}$



$0.24 \times 10^{-12} \text{ N}$



$24 \times 10^{-12} \text{ N}$



$0.024 \times 10^{-12} \text{ N}$

Explanation



SAEEDMDCAT

$$F = qvB \sin \theta = 1.6 \times 10^{-19} \times 2 \times 10^7 \times 1.5 \times \frac{1}{2}$$

1

2

3

4

5

6

7



Practice test 3 Unit 8



Correct



Unattempted



Incorrect



7/10

Q :

A positively charged particle moving due east enters a region of uniform magnetic field directed vertically upwards. The particle will

A

Get deflected vertically upwards

B

Move in a circular orbit with its speed increased

C

Move in a circular orbit with its speed unchanged

D

Continue to move due east

Explanation

When particle enters perpendicularly in a magnetic field, it moves along a circular path with constant speed.

1

2

3

4

5

6

7



Practice test 3 Unit 8



Correct



Unattempted



Incorrect



8/10

Q :

An electron is travelling in east direction and a magnetic field is applied in upward direction then electron will deflect in



South



North



West



East

SAEED MDCAT

SAEED MDCAT TEAM



SAEEDMDCAT

4

5

6

7

8

9

10



Practice test 3 Unit 8



Correct



Unattempted



Incorrect



9/10

Q :

A homogeneous electric field E and a uniform magnetic field B are pointing in the same direction. A proton is projected with its velocity parallel to E . It will



Go on moving in the same direction with increasing velocity



Go on moving in the same direction with constant velocity



Turn to its right



Turn to its left

Explanation



SAEEDMDCAT

Here magnetic force is zero, but the velocity increases due to electric force.

4

5

6

7

8

9

10



Q :

An electron is travelling along the x-direction. It encounters a magnetic field in the y-direction. Its subsequent motion will be

A

Straight line along the x-direction

B

A circle in the xz-plane

C

A circle in the yz-plane

D

A circle in the xy-plane

Explanation

$$\vec{F} = -e(\vec{v} \times \vec{B}) \Rightarrow \vec{F} = -e[v\hat{i} \times B\hat{j}]$$


i.e. Force on electron is acting towards negative z-axis. Hence particle will move on a circle in xz-





QUIZZES

Practice test 4 Unit 8



10 Questions



7 min

Topics

Path followed by charge particle magnetic field

[Start Quiz](#)

SAEED MDCAT

SAEED MDCAT TEAM



SAEEDMDCAT

06 : 58



1/10



7 min



Hint

Q : A photon while passing through a magnetic field are deflected towards

A

north pole

B

south pole

C

are ionized

D

none of these

SAEED MDCAT

SAEED MDCAT TEAM



SAEEDMDCAT

1

2

3

4

5

6

7

06 : 55



2/10



7 min



Hint

Q : An electron accelerated through a potential difference V passes through a uniform transverse magnetic field and experience a force F . If the accelerating potential is increased to $2V$, the electron in the same magnetic field will experience a force.

A

F

B

$F/2$

C

$\sqrt{2}F$

D

$2F$

SAEED MDCAT

SAEED MDCAT TEAM



SAEEDMDCAT

1

2

3

4

5

6

7

06 : 52



3/10



7 min



Hint

Q : Two ions having masses in the ratio 1:1 and charges 1:2 are projected into uniform magnetic field perpendicular to field with speeds in the ratio 2:3 the ratio of the radii of circular parts along which the two particles move is



4:3



2:3



3:1



1:4

SAEED MDCAT

SAEED MDCAT TEAM



SAEEDMDCAT

1

2

3

4

5

6

7

06 : 50



4/10



7 min



Hint

Q : Lorentz electric force has direction

A

similar to electric field

B

opposite of electric field

C

scalar quantity

D

None

SAEED MDCAT

SAEED MDCAT TEAM



SAEEDMDCAT

1

2

3

4

5

6

7

06 : 48



5/10



7 min



Hint

Q : The electric force can

A

change the speed of particle

B

cannot change the speed

C

has not effect

D

all of these

SAEED MDCAT

SAEED MDCAT TEAM



SAEEDMDCAT

1

2

3

4

5

6

7

06 : 45



6/10



7 min



Hint

Q : A proton moving with a constant velocity passes through a region of space without any change in its velocity. If E and B represent the electric and magnetic fields respectively, then this region of space may have

A

$E=0, B \neq 0$

B

$E \neq 0, B=0$

C

$E=0, B=0$

D

$E \neq 0, B \neq 0$

SAEED MDCAT

SAEED MDCAT TEAM



SAEEDMDCAT

1

2

3

4

5

6

7

06 : 43



7/10



7 min



Hint

Q :

A strong magnetic field is applied on a stationary electron, then

A

The electron moves in the direction of the field

B

The electron moves in an opposite direction

C

The electron remains stationary

D

The electron starts spinning

SAEED MDCAT

SAEED MDCAT TEAM



SAEEDMDCAT

1

2

3

4

5

6

7

06 : 40



8/10



7 min



Hint

Q :

An electron enters a magnetic field whose direction is perpendicular to the velocity of the electron. Then

A

The speed of the electron will increase

B

The speed of the electron will decrease

C

The speed of the electron will remain the same

D

The velocity of the electron will remain the same

SAEED MDCAT

SAEED MDCAT TEAM



SAEEDMDCAT

4

5

6

7

8

9

10

06 : 38



9/10



7 min



Hint

Q :

When a magnetic field is applied in a direction perpendicular to the direction of cathode rays, then their

A

Energy decreases

B

Energy increases

C

Momentum increases

D

Momentum and energy remain unchanged

SAEED MDCAT

SAEED MDCAT TEAM



SAEEDMDCAT

4

5

6

7

8

9

10

06 : 36



10/10



7 min



Hint

Q :

At a specific instant emission of radioactive compound is deflected in a magnetic field. The compound can emit

- (i) Electrons (ii) Protons
(iii) He^{2+} (iv) Neutrons
- The emission at the instant can be

A

i, ii, iii

B

i, ii, iii, iv

C

iv

D

ii, iii

SAEED MDCAT

SAEED MDCAT TEAM



SAEEDMDCAT

4

5

6

7

8


9

10



QUIZ RESULT

Practice test 4 Unit 8



10



7 min



03-May-2021



0 sec



0/10



0.0%

SAEED MDCAT

Result Detail

SAEED MDCAT TEAM



SAEEDMDCAT





Practice test 4 Unit 8



Correct



Unattempted



Incorrect



1/10

Q : A photon while passing through a magnetic field are deflected towards

A

north pole

B

south pole

C

are ionized

D

none of these

Explanation

Photon is charge less so, it will not deflect in magnetic field.



SAEEDMDCAT

1

2

3

4

5

6

7



Practice test 4 Unit 8



Correct



Unattempted



Incorrect



2/10

Q : An electron accelerated through a potential difference V passes through a uniform transverse magnetic field and experience a force F . If the accelerating potential is increased to $2V$, the electron in the same magnetic field will experience a force.

A

F

B

$F/2$


C

$\sqrt{2}F$

D

$2F$

Explanation

 **SAEEDMDCAT**

$$K.E. = \frac{1}{2}mv^2 = qV \Rightarrow v = \sqrt{\frac{2qV}{m}}$$
$$F = qvB = qB\sqrt{\frac{2qV}{m}}$$



Practice test 4 Unit 8

accelerating potential is increased to 2V, the electron in the same magnetic field will experience a force.

A

F

B

F/2

C

$\sqrt{2}F$

D

2F

Explanation

$$K.E. = \frac{1}{2}mv^2 = qV \Rightarrow v = \sqrt{\frac{2qV}{m}}$$

$$F = qvB = qB \sqrt{\frac{2qV}{m}}$$

$$\therefore qB \sqrt{\frac{2q}{m}} = \text{constant}$$

$$\text{So } F \propto \sqrt{V}$$

When the acceleration potential is increased to 2V

then $F' = \sqrt{2V}$ the ratio of force become

$$\Rightarrow \frac{F'}{F} = \sqrt{\frac{2V}{V}} = \sqrt{2} \Rightarrow F' = \sqrt{2}F$$



Practice test 4 Unit 8



Incorrect



3/10

Q : Two ions having masses in the ratio 1:1 and charges 1:2 are projected into uniform magnetic field perpendicular to field with speeds in the ratio 2:3 the ratio of the radii of circular parts along which the two particles move is

A

4:3

B

2:3

C

3:1

D

1:4

Explanation

As we know that

$$\frac{q}{m} = \frac{v}{Br}$$

$$r = \frac{mv}{qB}$$

$$\Rightarrow \frac{r_1}{r_2} = \frac{m_1}{m_2} \cdot \frac{v_1}{v_2} \left(\frac{q_2}{q_1} \right) = 1 \times \left(\frac{2}{3} \right) \left(\frac{2}{1} \right) = \frac{4}{3}$$



Practice test 4 Unit 8



Correct



Unattempted



Incorrect



4/10

Q : Lorentz electric force has direction



similar to electric field



opposite of electric field



scalar quantity



None

Explanation

Lorentz electric force in the direction of electric field



SAEEDMDCAT

1

2

3

4

5

6

7



Practice test 4 Unit 8



Correct



Unattempted



Incorrect



5/10

Q : The electric force can



change the speed of particle



cannot change the speed



has not effect



all of these

Explanation

Information



SAEEDMDCAT

1

2

3

4

5

6

7



Practice test 4 Unit 8



Correct



Unattempted



Incorrect



6/10

Q : A proton moving with a constant velocity passes through a region of space without any change in its velocity. If E and B represent the electric and magnetic fields respectively, then this region of space may have

A

$E=0, B \neq 0$

B

$E \neq 0, B=0$

C

$E=0, B=0$

D

$E \neq 0, B \neq 0$

Explanation

Here the proton has no acceleration so $E=B=0$. When $E=0$ but $B \neq 0$, but parallel to the motion of proton, there will be no force acting. When $E \neq 0$ and $B \neq 0$ and E , B and motion of proton (v) are mutually perpendicular, there may be no net force. Forces due to E and B cancel each other.

1

2

3

4

5

6

7



Practice test 4 Unit 8



Correct



Unattempted



Incorrect



7/10

Q:

A strong magnetic field is applied on a stationary electron, then



The electron moves in the direction of the field



The electron moves in an opposite direction



The electron remains stationary



The electron starts spinning

Explanation

Magnetic force acts on a moving charge.

1

2

3

4

5

6

7



Practice test 4 Unit 8



Correct



Unattempted



Incorrect



8/10

Q:

An electron enters a magnetic field whose direction is perpendicular to the velocity of the electron. Then

A

The speed of the electron will increase

B

The speed of the electron will decrease

C

The speed of the electron will remain the same

D

The velocity of the electron will remain the same

Explanation

Force acts perpendicular to the velocity in a magnetic field, so speed of electron will remain same.

4

5

6

7

8

9

10



Practice test 4 Unit 8



Correct



Unattempted



Incorrect



9/10

Q :

When a magnetic field is applied in a direction perpendicular to the direction of cathode rays, then their

A

Energy decreases

B

Energy increases

C

Momentum increases

D

Momentum and energy remain unchanged

Explanation

Since force is perpendicular to direction of motion. energy and magnitude of momentum remains constant.

4

5

6

7

8

9

10



Practice test 4 Unit 8



Correct



Unattempted



Incorrect



10/10

Q :

At a specific instant emission of radioactive compound is deflected in a magnetic field. The compound can emit

- (i) Electrons (ii) Protons
(iii) He^{2+} (iv) Neutrons
- The emission at the instant can be

A

i, ii, iii

B

i, ii, iii, iv

C

iv

D

ii, iii



Explanation

SAEEDMDCAT

Charged particles deflects in magnetic field.